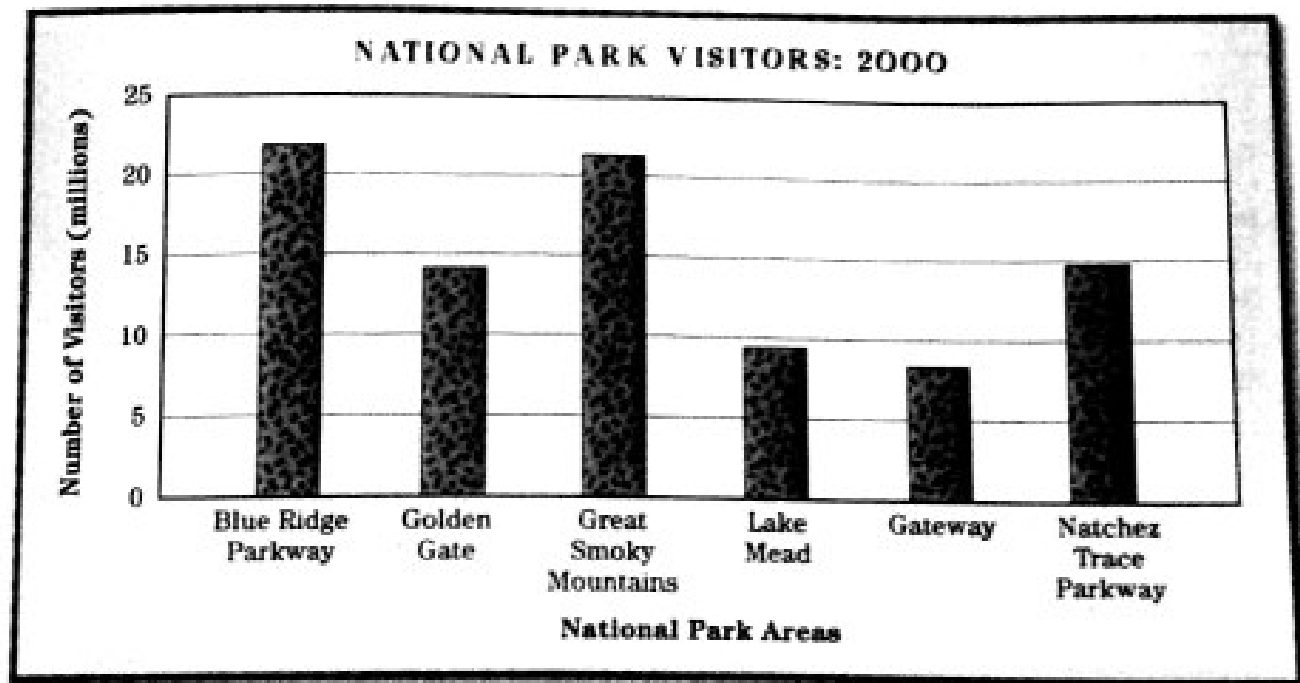


Name _____ Date _____

Popular Parks

Millions of people visited national parks in the year 2000. The bar graph below shows the numbers of visitors to six of the most popular parks. Use the graph to answer the questions.



- 1 Which national park area had the most visitors in 2000?

- 2 Which of these six areas had the fewest visitors in 2000?

- 3 About how many people visited the Great Smoky Mountains National Park in 2000?

- 4 Which area had just about the same number of visitors as the Golden Gate?

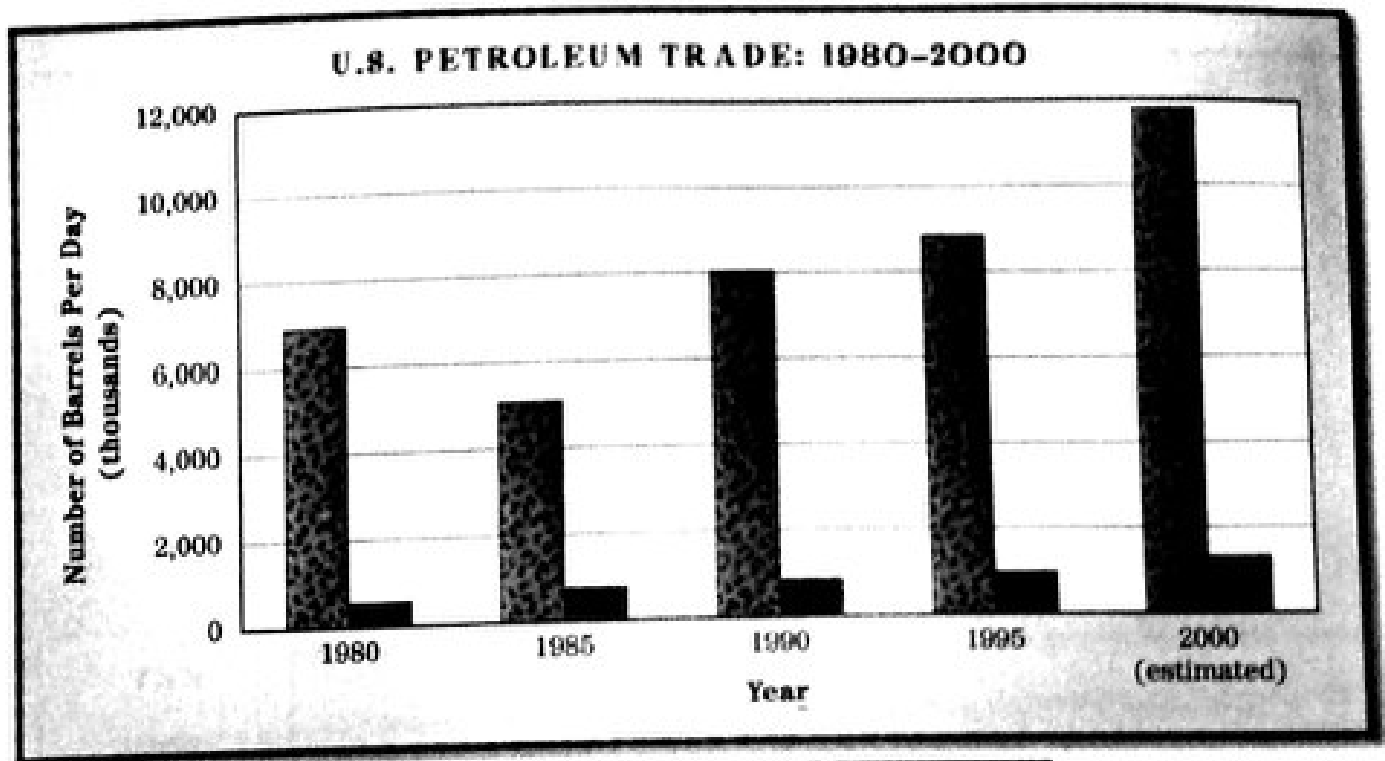
- 5 About how many more people visited the Golden Gate than Lake Mead?

Name _____

Date _____

All About Oil

The bar graph below shows the differences in U.S. petroleum imports and exports from 1980 to 2000. Use the graph to answer the questions.



KEY = import = export

- 1 What general trend do you see in the number of barrels of petroleum imported by the United States each year?

- 2 What general trend do you see in the amount of petroleum exported by the United States each year?

- 3 How closely do the figures for 1985 fit these two trends?

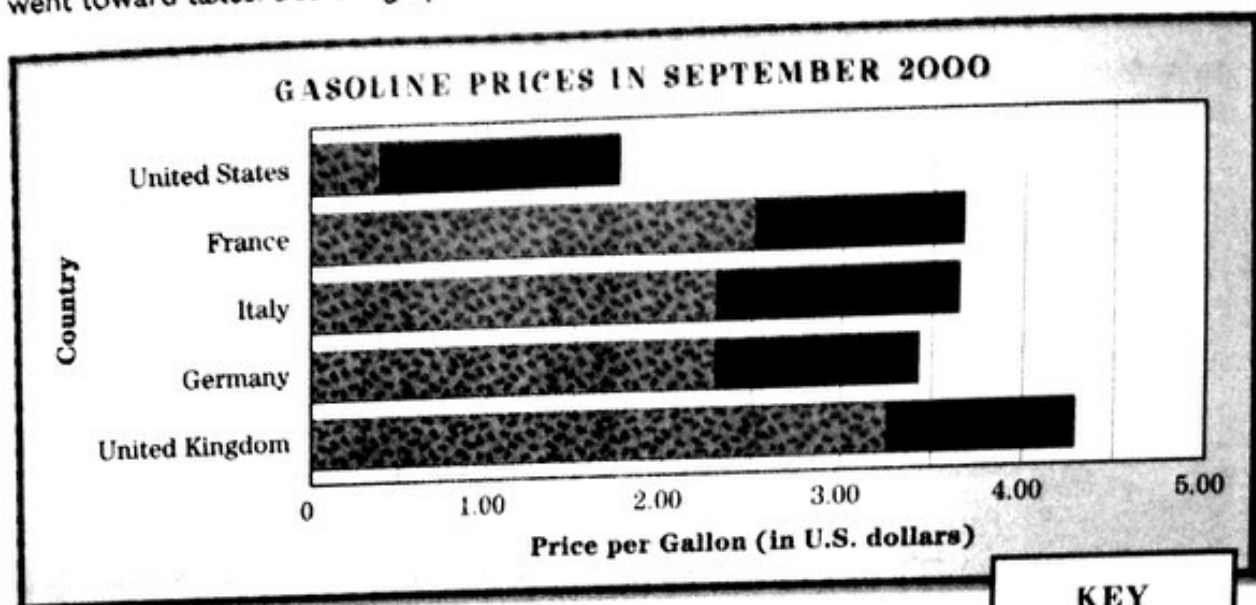
- 4 In general, how do U.S. petroleum imports compare with exports each year?

Name _____

Date _____


Gas Guzzling

The bar graph below shows the average price (in U.S. dollars) for a gallon of gasoline in the United States and four European countries in September 2000—and how much of that price went toward taxes. Use the graph to choose the best answer to each question.



KEY

 tax

 price per gallon

- 1 In September 2000, which country had the highest price per gallon?
 - (a) United States (c) United Kingdom
 - (b) France (d) Italy

- 2 In France, about how much of the price per gallon went to taxes?
 - (a) $\frac{1}{4}$ (c) $\frac{3}{4}$
 - (b) $\frac{1}{2}$ (d) $\frac{2}{3}$

- 3 In the United Kingdom, what percentage of the price per gallon went to taxes?
 - (a) about 90% (c) about 60%
 - (b) about 75% (d) about 50%

- 4 In Italy, the total price per gallon of gasoline was about _____.
 - (a) \$3.65 (c) \$2.30
 - (b) \$3.25 (d) \$1.75

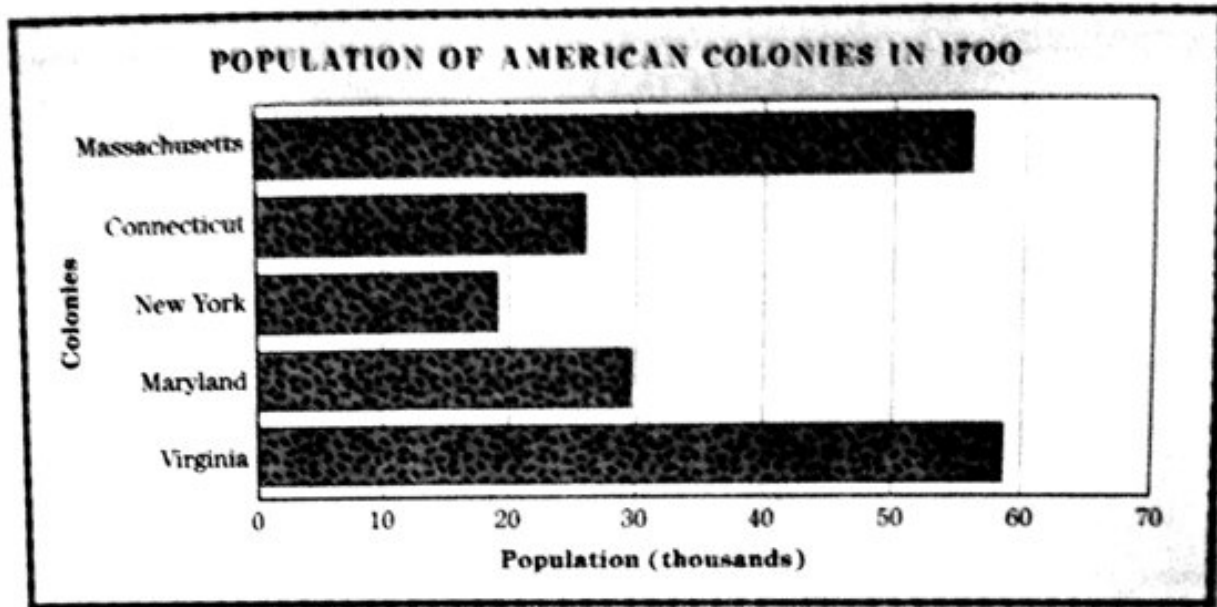
- 5 Which conclusion about gasoline prices in the United States is most likely valid?
 - (a) U.S. prices are higher than prices in Europe.
 - (b) Americans pay less than half the price per gallon that most Europeans pay.
 - (c) U.S. prices include a higher percentage of taxes than European prices do.
 - (d) Americans pay higher taxes per gallon than people in any other country.

Name _____

Date _____

Coming to America

Mrs. Bates made this bar graph for her 5th grade class showing how many colonists lived in parts of America in 1700. Use the graph to answer the questions.



1 According to the graph, what was the population of Massachusetts in 1700?

2 Which colony had the smallest population?

3 Which colony had the largest population?

4 What was the population of Maryland in 1700?

5 About how many more people lived in Massachusetts than in New York?
