


Name _____

Date _____

Making Music

Musical artists, from classical musicians to rock stars to rappers, often record their music in various formats. The circle graphs below compare the sales of these different formats between 1995 and 2000. Use the graphs to answer the questions.



- In 1995, what percentage of recorded music was sold on cassettes?

- Describe the change in sales of compact discs between 1995 and 2000.

- Which type(s) of recorded music had a lower percentage of the total sales in 2000 than in 1995?

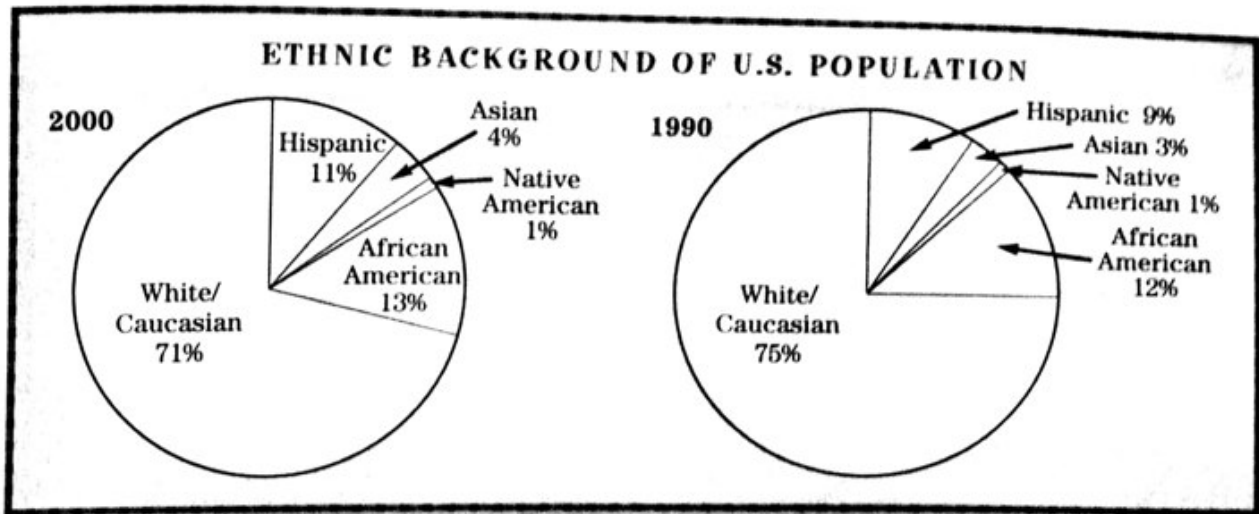
- Write one or two sentences describing the changes in sales of recorded music that you would expect to see in a circle graph for 2005.

Name _____

Date _____

A Nation of Many Colors

The circle graphs below show estimated figures for the ethnic backgrounds of U.S. citizens in 2000 and 1990. Use the graphs to answer the questions.



1 Which was the smallest ethnic group in both years?

2 People of Asian background represented what percentage of the population in 2000?

3 In 1990, the total U.S. population was about 249 million. About how many people were African Americans?

4 Describe the changes that took place between 1990 and 2000.

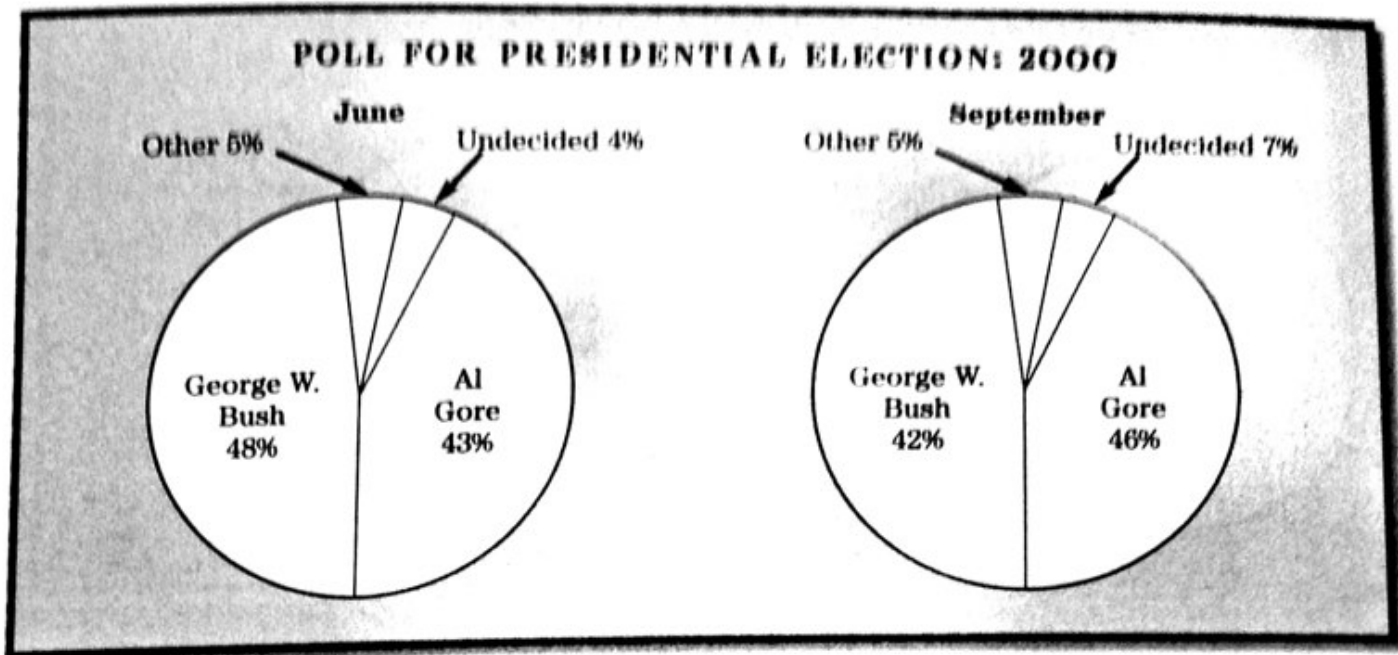
5 Between 1990 and 2000, the total U.S. population increased from 249 million to about 280 million. What conclusion can you draw about the Native American population during the same time period?

Name _____

Date _____

Who Would YOU Vote For?

In June and September of 2000, polls were conducted to determine how many people planned to vote for different presidential candidates in the November election. Use the circle graphs showing the poll results to answer the questions.



- 1 What percentage of voters supported George W. Bush in June 2000?

- 2 What percentage supported Al Gore in June 2000?

- 3 What percentage of voters did not support either Bush or Gore in June?

- 4 In the race between Bush and Gore, how did the poll results change from June to September?

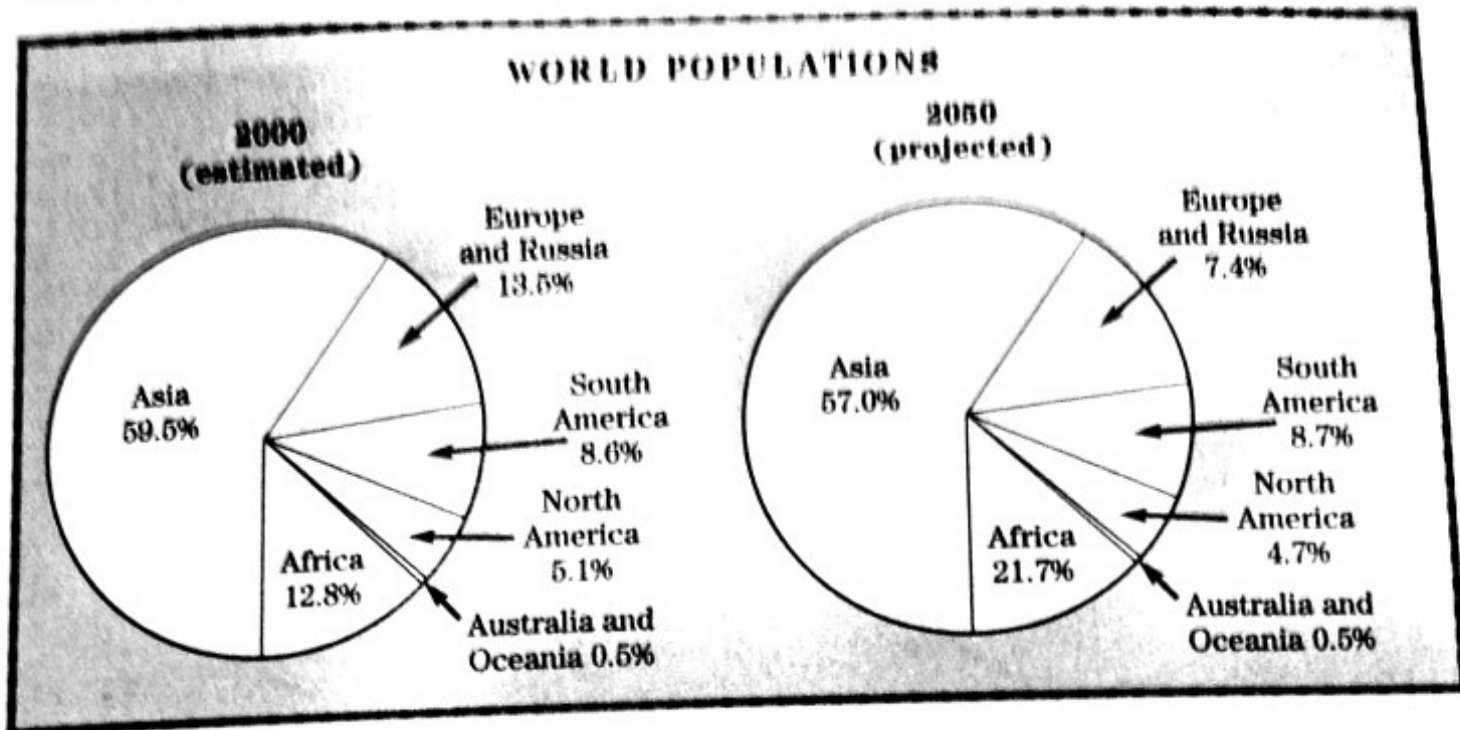
- 5 How did the number of "Undecided" voters change from June to September?

Name _____

Date _____

How Many People?

The circle graphs below show the estimated shares of the world population by region in 2000 and the projected shares in 2050. Use the graphs to answer the questions.



- 1 In 2000, which region had the largest population?

- 2 In 2000, what percentage of the world's population lived in South America?

- 3 In 2000, what percentage of the world's population lived in Europe and Russia?

- 4 By 2050, which region will have the greatest increase in its share of the world population?

- 5 In 2050, what percentage of the world's population will live in North America?

- 6 By 2050, which regions' shares of the world population will decrease?
