

Regions of the United States

Name _____

ATLANTIC OCEAN







CANADA

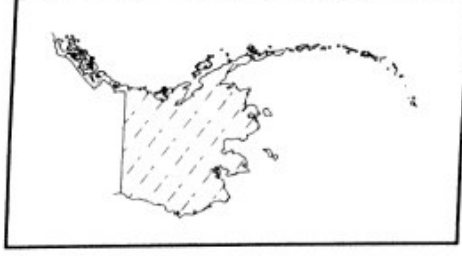
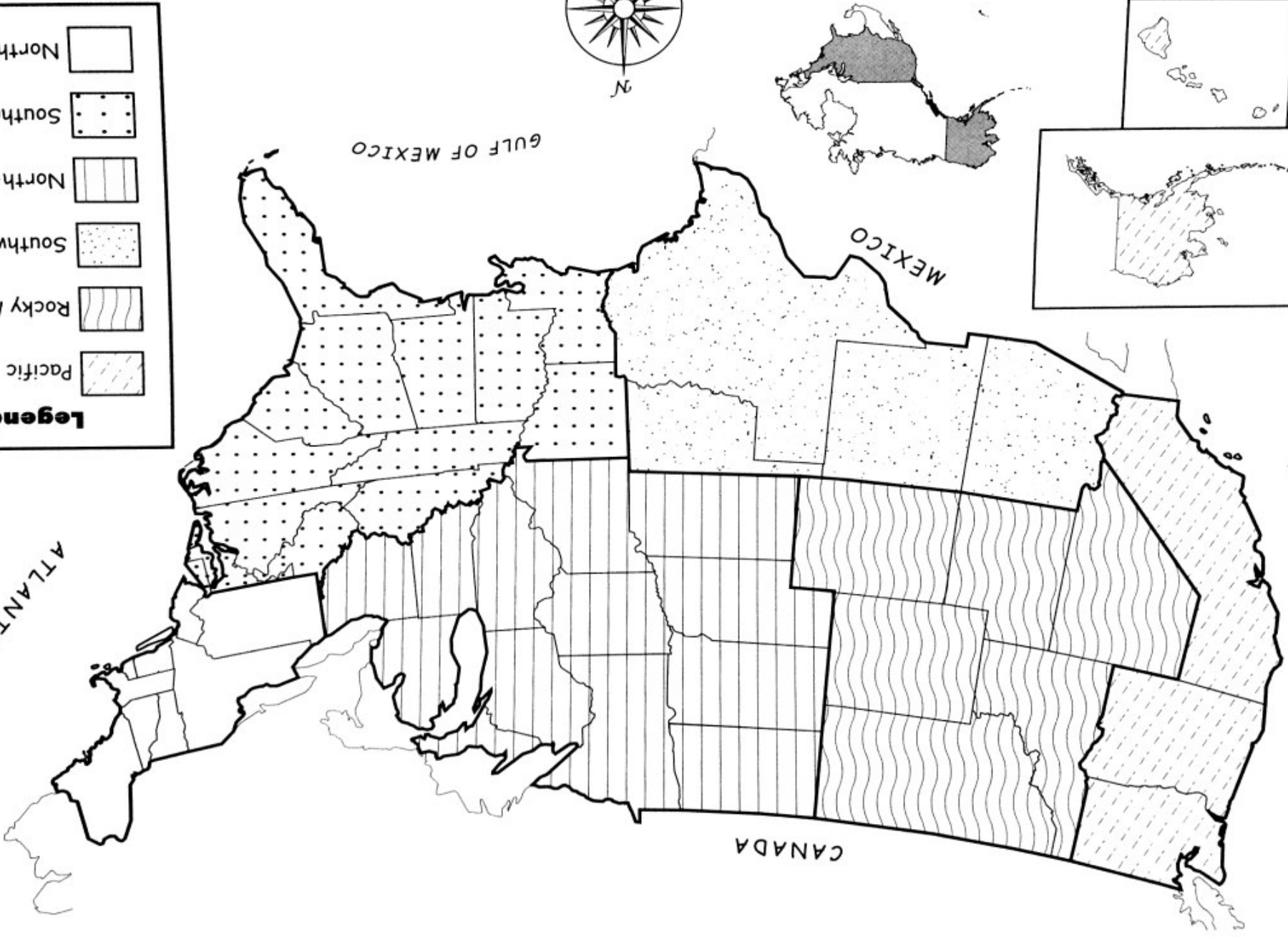
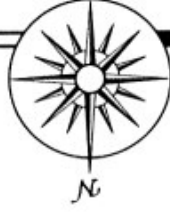
GULF OF MEXICO

MEXICO

PACIFIC OCEAN

Legend

-  Pacific
-  Rocky Mountain
-  Southwest
-  North-Central
-  Southeast
-  Northeast



Regions of the United States

Monday

1. The United States is divided into how many regions? Are all 50 states represented in these regions?

2. Alaska and Hawaii are part of which region? Why are they part of this region?

Tuesday

1. Which regions are named for the directional locations?

2. Which region is named for a major landform?

Wednesday

1. Which regions border the Atlantic Ocean?

2. The Great Lakes border two regions and two countries. Name them.



Regions of the United States

Thursday

1. How many states make up the Rocky Mountain region? Name at least three states in this region.

2. Sometimes Arizona and New Mexico are grouped with another region. In which other region could they belong?

Friday

1. If a region were named the Mexican Border region, which states would be included?

2. Rank the six regions from largest to smallest based on the number of states in each region.

Challenge

Make a chart listing the six regions. Under each region, list the states that belong to that region. Attach the chart to the back of the map. Use a United States political map as a reference to help you name the states. Remember to make sure you include all 50!