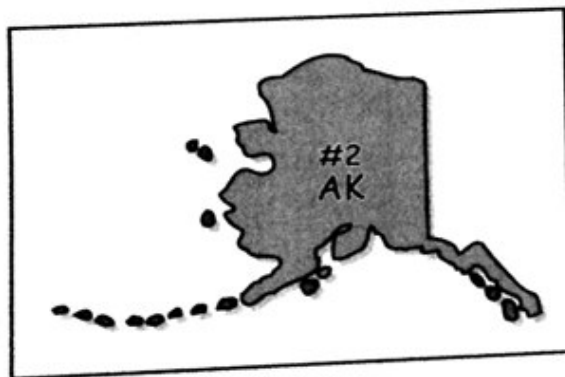
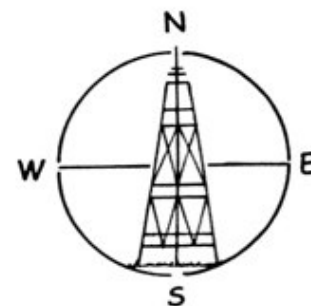
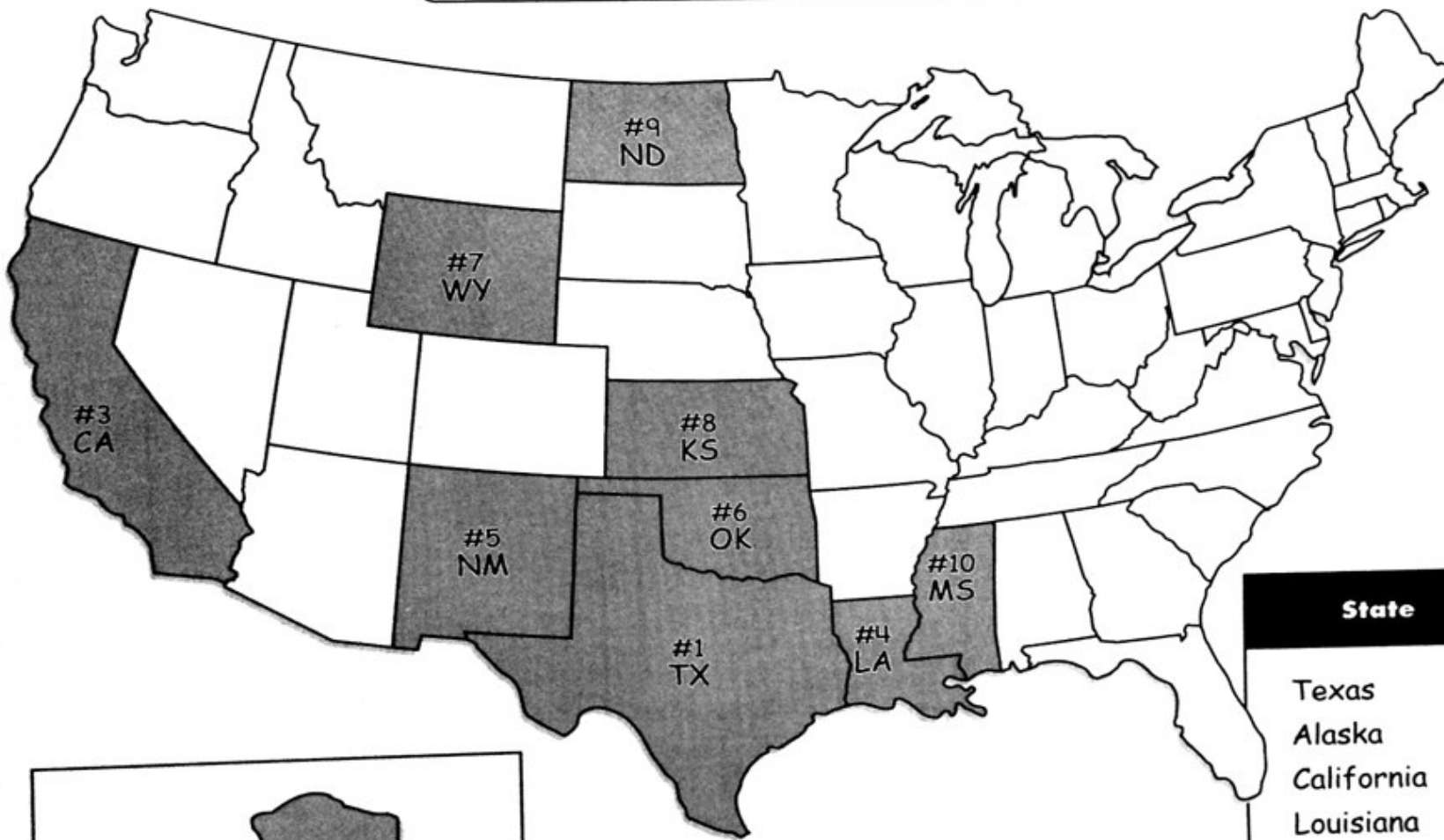


Name _____

The Top Ten Oil-Producing States



State	Barrels of Crude Oil
Texas	411,985,000
Alaska	359,335,000
California	258,010,000
Louisiana	93,477,000
New Mexico	67,041,000
Oklahoma	66,642,000
Wyoming	54,717,000
Kansas	32,721,000
North Dakota	30,993,000
Mississippi	18,015,000

2002 Statistics from Energy Information Administration

The Top Ten Oil-Producing States

Monday

1. Name the top five oil-producing states.

2. Which states rank from 6th to 10th in oil production?

Tuesday

1. In 2002, how many states produced more than 50 million barrels of crude oil?

2. In 2002, how many states produced more than 100 million barrels of crude oil? Name them.

Wednesday

1. How many barrels of crude oil did the top two states produce together in 2002?

2. Name the 2 top ten oil states that border the Mississippi River. Which one produced more crude oil in 2002?



The Top Ten Oil-Producing States

Thursday

1. What are the rankings of the two oil states that border the Pacific Ocean?

2. Canada and Mexico are top oil-producing countries. Which oil-producing states border Canada and Mexico?

Friday

1. Oil is a nonrenewable natural resource. What does *nonrenewable natural resource* mean?

2. Alaska, California, Louisiana, and Texas drill for crude oil offshore. What does *offshore drilling* mean?

Challenge

Write this story problem and the answer on the back of the map:

The U.S. produces 9.08 million barrels of crude oil per day. It consumes 19.7 million barrels per day. How many barrels of oil have to be imported each day from other oil-producing countries?