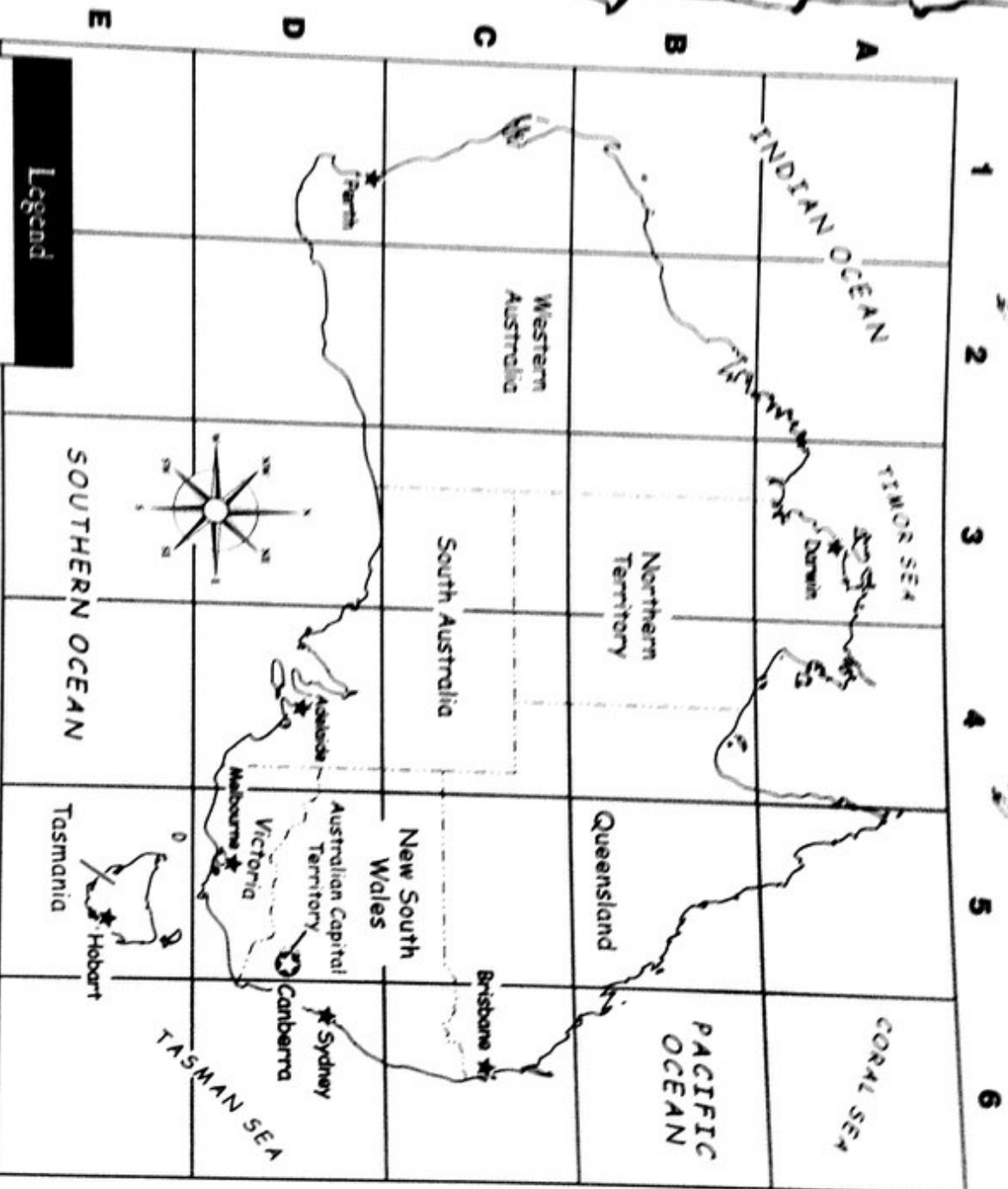





## Australia



## Legend

-  national capital
-  state or territory capital
-  state or territory border

Australia is divided into six states and two territories. The states are New South Wales, Queensland, South Australia, Tasmania, Victoria, and Western Australia. The two territories are the Australian Capital Territory and the Northern Territory.

## Index

Adelaide D# \_\_\_\_\_



# A Map Grid

## Monday

1. How many states and territories of Australia are shown on the map grid?  
\_\_\_\_\_
2. Which state in Australia is located at E5?  
\_\_\_\_\_

## Tuesday

1. What is the capital of Victoria? In which grid square is it located?  
\_\_\_\_\_
2. Brisbane is the capital of which state? In which grid square is it located?  
\_\_\_\_\_

## Wednesday

1. Which states/territories are located in a "B" grid square?  
\_\_\_\_\_  
\_\_\_\_\_  
\_\_\_\_\_
2. Which capitals are located in a "6" grid square?  
\_\_\_\_\_  
\_\_\_\_\_

# A Map Grid



## Thursday

1. What is the name of Australia's national capital? In which grid square is it located?  
\_\_\_\_\_
2. Which seas are located at A6 and D6?  
\_\_\_\_\_

## Friday

1. Which capital is northwest of Melbourne? In which grid square is it located?  
\_\_\_\_\_
2. Which state or territory is the largest in land area? In which grid square is the capital of this state or territory?  
\_\_\_\_\_

## Challenge

At the bottom of the map, complete an index for the eight capital cities shown on the map. Include the name of each capital and the grid squares in which they are located. For example: Canberra....D5. Be sure to put the capital cities in alphabetical order in your index.