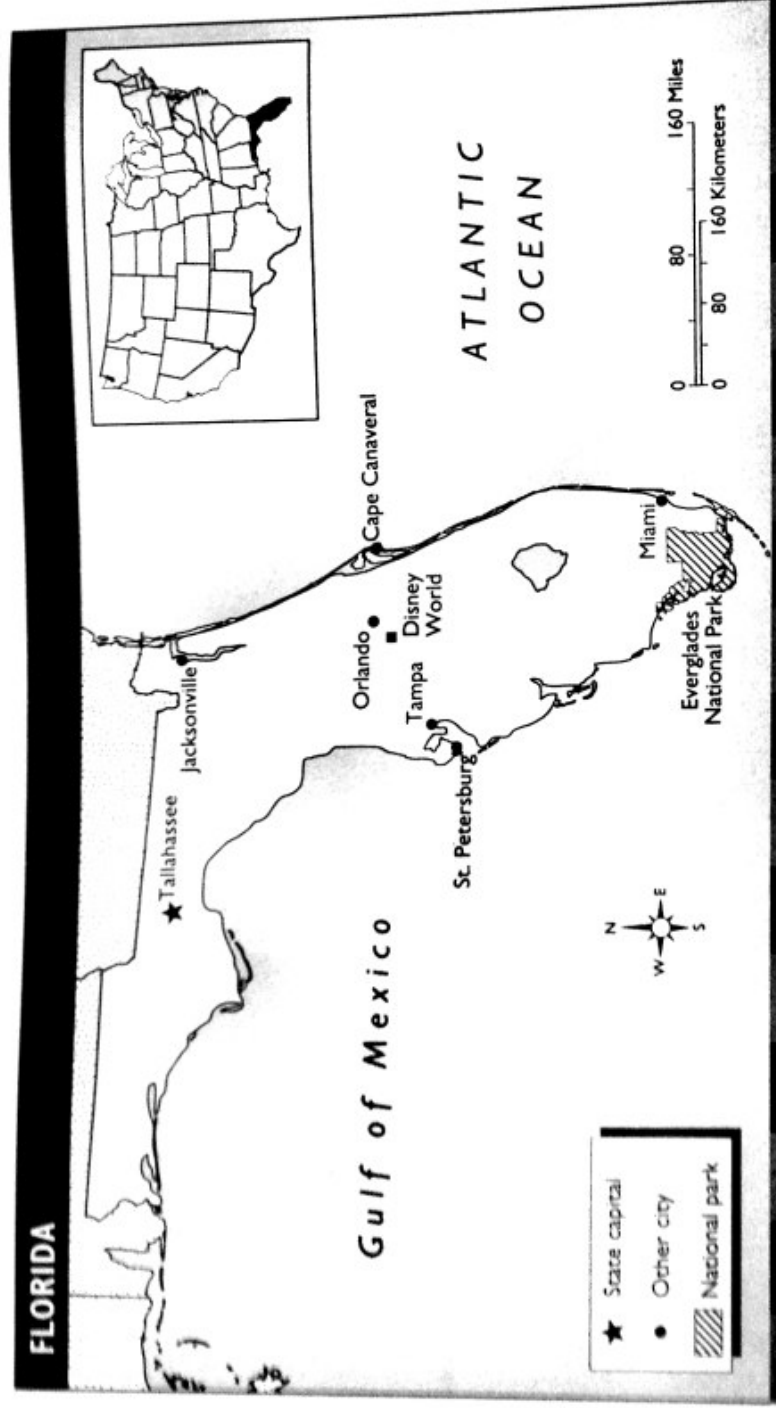


## FOLLOWING A TRIP TO FLORIDA ON A MAP

Use the map and map scale below to complete the activities. For help, you can refer to pages G4–G11 in your textbook.



1. Mia and her family visited Florida. In which part of the United States is Florida?

\_\_\_\_\_

2. In Tampa the family rented a car and drove to Disney World, near Orlando. In which direction did they travel?

\_\_\_\_\_

About how many miles did they travel?

\_\_\_\_\_

3. After visiting Disney World, Mia and her family drove to Cape Canaveral. In which direction did they travel?

\_\_\_\_\_

4. About how many kilometers is Cape Canaveral from Orlando?

\_\_\_\_\_

5. From Cape Canaveral, Mia and her family drove to Miami. About how many miles is Miami from Cape Canaveral?

\_\_\_\_\_

6. Their friends took them to Everglades National Park. In which direction is the park from Miami?

\_\_\_\_\_

7. Then Mia and her family flew from Miami to St. Petersburg. In which direction is St. Petersburg from Miami?

\_\_\_\_\_

Name: \_\_\_\_\_

Use with pages G4-G11.

## USING A MAP TO EXPLORE CALIFORNIA

Use the map and map key on the right to complete the activities. For help, you can refer to pages G4-G11 in your textbook.

1. Jason lives in California. In which part of the United States is California located? Circle your answer.

north    south    east    west

What did you use to find the answer to the question above?

\_\_\_\_\_

\_\_\_\_\_

2. Jason lives in the state capital of California. Circle the capital on the map.

How did you know which city was the state capital?

\_\_\_\_\_

\_\_\_\_\_

\_\_\_\_\_

3. When Jason and his family visit Mexico, they cross a boundary. How is this boundary shown on the map? Circle your answer.

\_\_\_\_\_

What does this symbol represent?

\_\_\_\_\_

4. Jason likes to visit California's national parks. His favorite is Yosemite National Park.

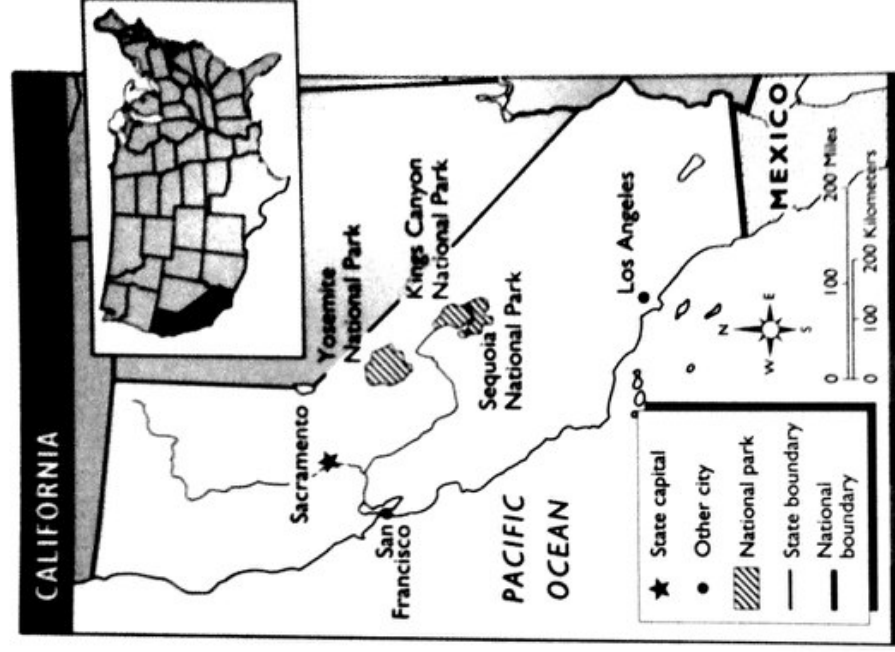
In which direction is Yosemite National Park from Sacramento? \_\_\_\_\_

5. What two other national parks are located southeast of Yosemite?

\_\_\_\_\_

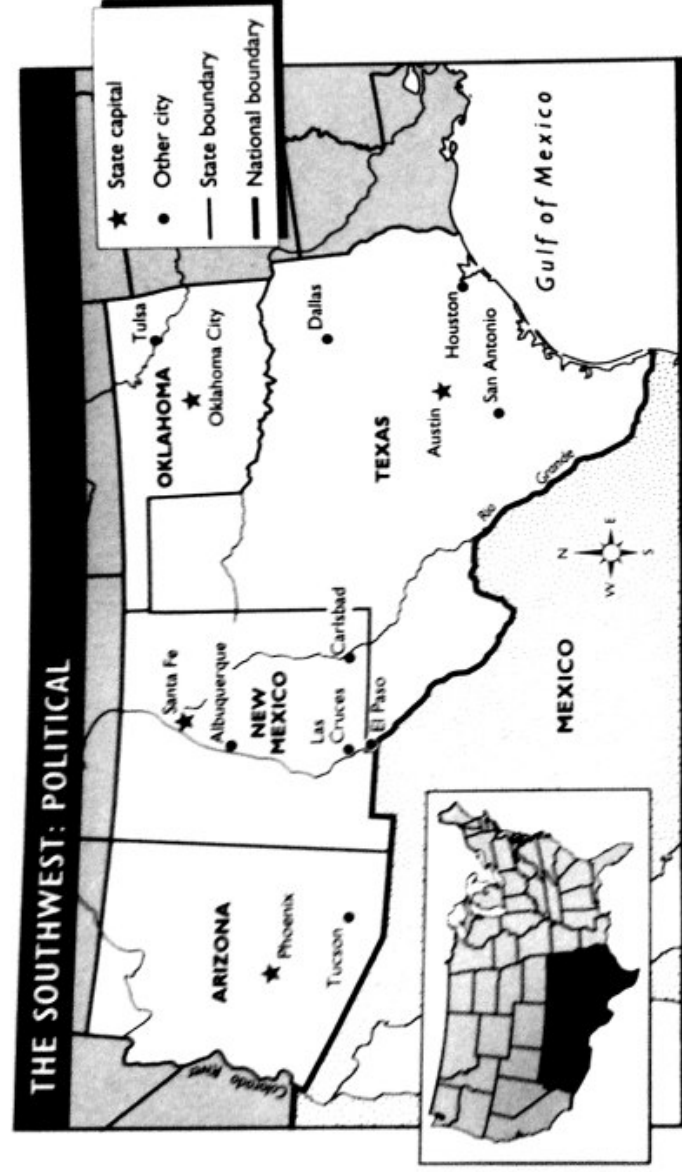
6. What helped you locate these parks on the map?

\_\_\_\_\_



## USING A POLITICAL MAP OF THE SOUTHWEST

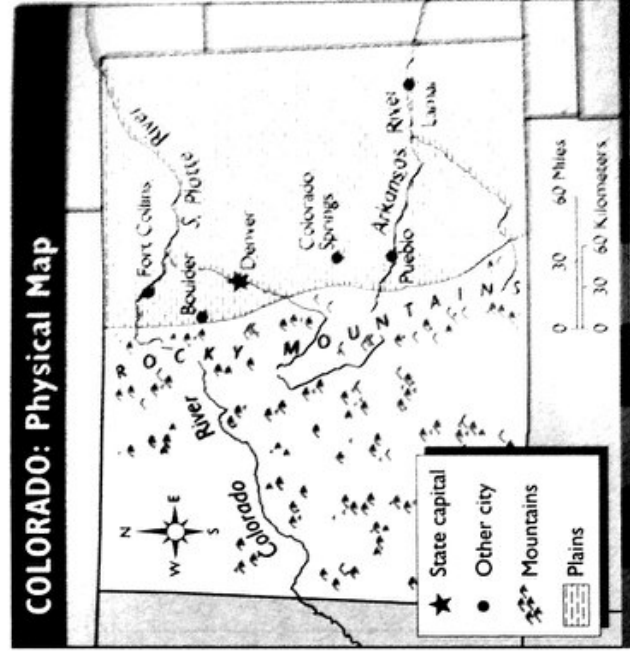
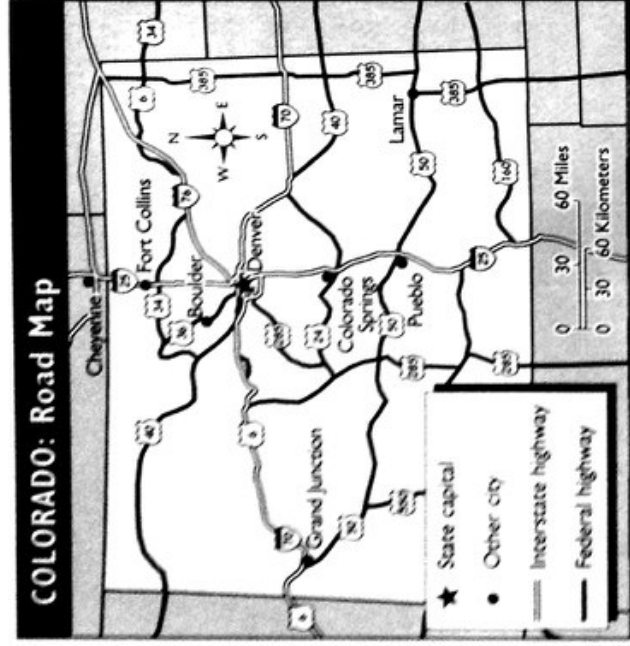
Use the map below to complete the activities. For help, you can refer to pages G4-G11 in your textbook.



- What kind of map is shown above?  
\_\_\_\_\_
  - How do you know?  
\_\_\_\_\_  
\_\_\_\_\_  
\_\_\_\_\_
- Which states are shown in the subject area of the map?  
\_\_\_\_\_  
\_\_\_\_\_  
\_\_\_\_\_
- Name the states and country that are located on the national boundary line.  
\_\_\_\_\_  
\_\_\_\_\_  
\_\_\_\_\_
- Which city on the map is located on the border of the United States and Mexico?  
\_\_\_\_\_
- List the capital cities for the states shown on the map.  
\_\_\_\_\_  
\_\_\_\_\_  
\_\_\_\_\_  
\_\_\_\_\_
- Which river runs along the national boundary line?  
\_\_\_\_\_  
\_\_\_\_\_

## ROAD AND PHYSICAL MAPS OF COLORADO

Use the two maps of Colorado below to complete the activities. For help, you can refer to pages G4-G11 in your textbook.



1. Which map would you use to plan a car trip through the state of Colorado?
- \_\_\_\_\_

2. Which map would you use to find the location of the Rocky Mountains in Colorado?
- \_\_\_\_\_

3. Which highway crosses Colorado from north to south?
- \_\_\_\_\_

4. As you travel across Colorado from east to west, does the land become more mountainous or less mountainous?
- \_\_\_\_\_

5. If you had to travel from Lamar to Pueblo, what highway would you take?
- \_\_\_\_\_

6. Would you expect to be driving through mountains? Why or why not?
- \_\_\_\_\_

7. Suppose you and your family planned the trip described below. Name the highways you would take. Then trace the route in red on one of the maps.

a. From Pueblo you drive across the Rocky Mountains to Grand Junction.

\_\_\_\_\_

b. From Grand Junction you drive to Denver.

\_\_\_\_\_

c. From Denver you drive to Boulder.

\_\_\_\_\_